

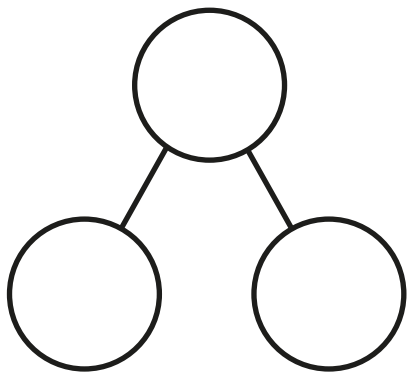
The addition symbol



I Complete the part-whole model to match the counters.

Complete the addition sentences.

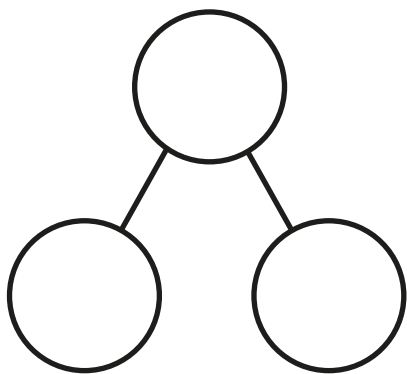
a)



$$\square + \square = \square$$

$$\square + \square = \square$$

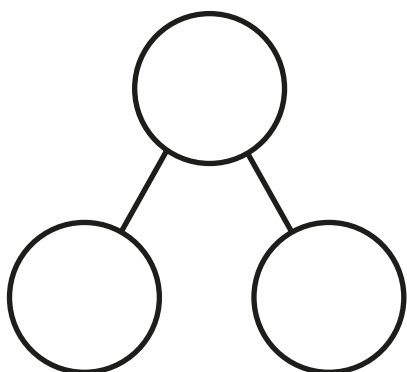
b)



$$\square + \square = \square$$

$$\square + \square = \square$$

c)



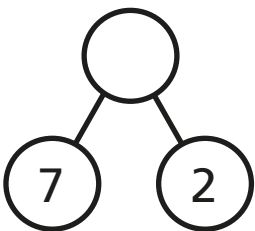
$$\square + \square = \square$$

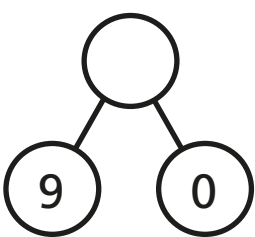
$$\square + \square = \square$$




2 Complete the part-whole models and addition sentences.

a)  $3 + 5 = \square$

b)  $7 + 2 = \square$

c)  $\square + \square = \square$

3 Find five different ways to make 8



$$\square + \square = 8$$

$$\square + \square = 8$$

$$\square + \square = 8$$

$$\square + \square = 8$$

$$\square + \square = 8$$